

Y2 Spring Homework

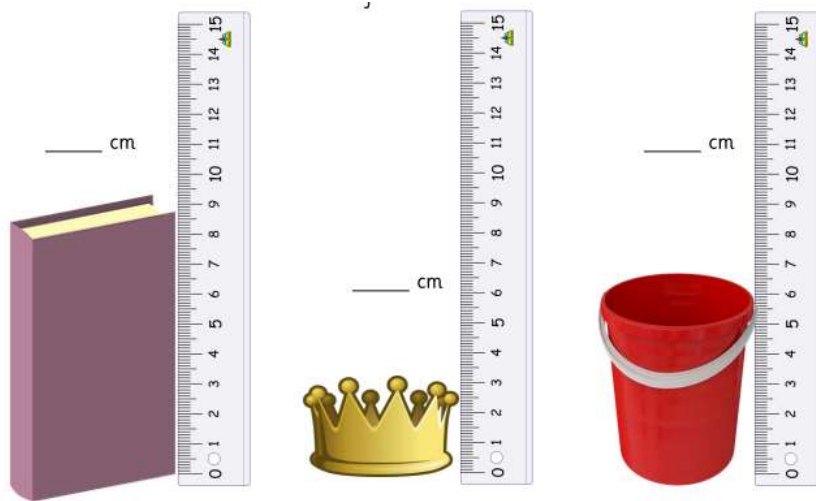
Height length

Mass, capacity and temperature

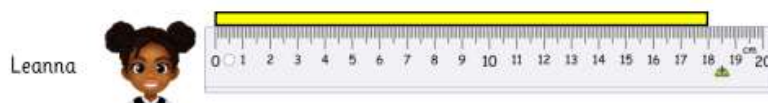
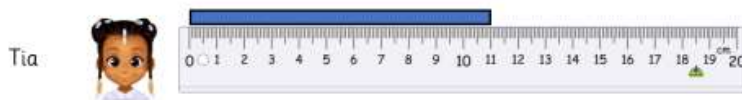
How long are these objects to the nearest cm?



How tall are these objects to the nearest cm?



Tia, Leanna and Malachi measure strips of paper.



_____ has the longest strip.

_____ has the second longest strip.

_____ has the shortest strip.

_____ has the second shortest strip.

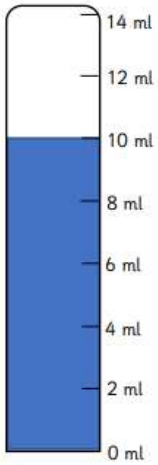
_____ 's strip is shorter than Tia's.

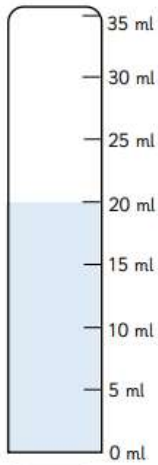
_____ 's strip is shorter than Leanna's.

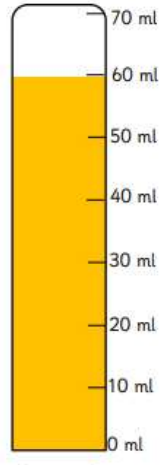
Leanna's strip is longer than _____ 's.

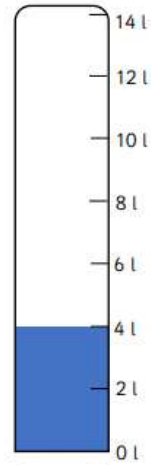
Tia's strip is longer than _____ 's.

How much liquid is in the containers? Remember to write the unit!



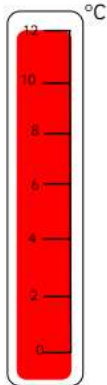


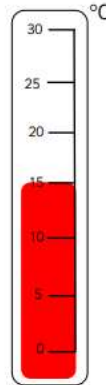


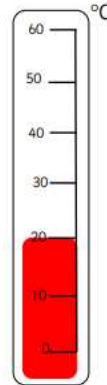





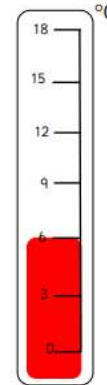
What temperature is shown?











Draw the temperature shown

